

THE SIPRO PRE - PLE SET III 2022

SOCIAL STUDIES WITH RELIGIOUS EDUCATION

Time Allowed: 2 Hours 15 Minutes

Index No.	Random No.						Personal No.		

Candidate's Name: _____

Candidate's Signature: _____

School Random No. _____

District: ID _____

READ THE FOLLOWING INSTRUCTIONS CAREFULLY:

1. This paper has two sections: A and B.
2. Section A has 40 questions (40 Marks).
3. Section B has 15 questions (60 Marks).
4. Attempt all questions in both sections. All answers to both sections A and B. must be written in the spaces provided.
5. All answers must be written in blue or black ball point pens or ink. Only diagrams and graph work must be done in pencil.
6. Unnecessary alteration of work will lead to loss of marks.
7. Any handwriting that cannot be easily read may lead to loss of marks.
8. Do not fill anything in the boxes indicated.

"FOR EXAMINER'S USE ONLY"

For Examiner's Use Only:

PAGES	MARKS	INITIALS
Page 1		
Page 2		
Page 3		
Page 4		
Page 5		
Page 6		
Page 7		
Page 8		
Page 9		
Total		

Please turn over



THE SIPRO EDUCATIONAL SERVICES LIMITED - KAMPALA

PUBLISHERS OF THE SIPRO TEACHERS GUIDES, LEARNER'S WORKBOOKS & PUPILS COMPANIONS

SECTION A: 40 MARKS

Questions 1 to 40 carry one mark each

1. Mention the use of a borehole in the community.

2. How are prisons important in the community?

3. Name any one important point where pedestrians cross busy roads.

4. What does the symbol below represent on a map?



5. Mention any one role of the speaker in the Parliament.

6. Give any one reason why the colonialists came to East Africa.

7. Name the largest down warped lake in Uganda.

8. Write the official who is in charge of elections at the district.


9. Mention one misuse of mobile phone today.

10. State any one way in which explorers from Europe led to the colonisation of Uganda.

11. Give any one reason why a school should have a noticeboard.

12. State any one way in which mangrove forests are important to the people of East Africa.

13. Give any one role of the highest civil servant in a district.



14. In which way is land important in the establishment of an industry?

15. State any one way in which Semel Kakungulu was important to the British.

16. Mention one benefit that Ugandans get from paying taxes.

17. State any one way the sea route of India was important to the Portuguese explorers

18. Why are internet users in Uganda still few?

19. Mention any one way child labour can be reduced in Uganda

20. How are the Chagga of Tanzania similar to the Bunyoro of Uganda in terms of ethnicity?

21. Give any one reason why children in Uganda are not allowed to take part in national elections.

22. What makes lumbering a major economic activity in Democratic Republic of Congo?

23. Name any one relief feature that forms a boundary between places.


24. Give any one reason why different animals live in different vegetation zones.

25. How has the Nile helped Sudan to carry out farming?

26. Mention any one tool earlyman used to chop his meat.

27. Give any one reason why the people of Uganda need to conserve the environment.

28. Name any one tributary of River Congo.



29. Name the document which helps teachers to know the attendance of pupils in a class.

30. Give any one way colonial governments made farmers unhappy in East Africa.

31. How does a common language promote trade in an area?

32. Write any one negative effect of poverty in our society today

33. State any one way in which Lamogi rebellion affected the people of Northern Uganda.

34. Mention any one social value of playing football at school

35. Name the specialised Agency of United Nations that fights the outbreak of diseases in the world.

In questions 36 to 40, answer Either the Christian Or Islamic question but not both. No marks will be awarded to a candidate who attempts both alternatives on the same number.

36. *Either* In which town was Jesus Christ buried?

Or In which town was Prophet Muhammad buried?

37. *Either* Give any one reason why Christians should take good care of their Bibles.


Or Give any one reason why Muslims should take good care of their Qur'ans.

38. *Either* State any one effect of sin to a Christian.

Or State any one effect of sin to a Muslim.

39. *Either* Name the person in the Bible who was stoned to death for his strong faith.

Or Why did the people of Taif reject Prophet Muhammad (PBUH)?



40 Either Write one way Christians can overcome failure

Or Write one way Muslims can overcome failure.

SECTION B: 60 MARKS

Questions 41 to 55 carry four marks each

41. a) Give two reasons why many forests have been destroyed in Africa.

(i) _____

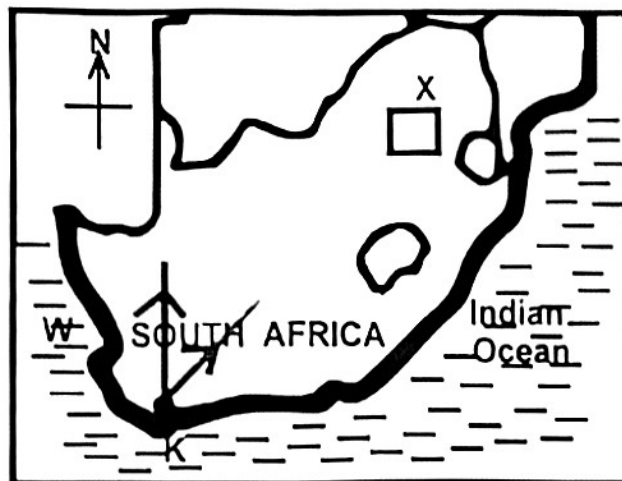
(ii) _____

(b) Mention any two ways of conserving forests.

(i) _____

(ii) _____

42. Study the sketch map of South Africa below and use it to answer the questions that follow.




(a) Name the:-

(i) seaport marked K: _____

(ii) water body marked W: _____

(b) Mention the major mineral extracted from the area marked X.

(c) Write the name that was given to the movement of the Boers indicated using arrows.



43 b) State any two ways children protect their property at school

(i) _____

(ii) _____

(b) Why is sharing encouraged among children at school?

(i) _____

(ii) _____

44 Complete the table below correctly.

River	Dam	Country	Reservoir
(i) _____	Aswan High dam	Egypt	L Nasser
R Niger	(ii) _____	Nigeria	L Kainji
R Zambezi	Kariba dam	(iii) _____	L Kaliba
R Volta	Akosombo dam	Ghana	(iv) _____

45 a) Name any two services a community expects the government to provide for them.

(i) _____

(ii) _____

(b) State any two challenges that the government faces in providing social services

(i) _____

(ii) _____

46 a) How did earlyman discover fire?

(b) State any two ways places where earlyman settled are important to people today

(i) _____

(ii) _____

(c) How did fire increase earlymen's security?

47 a) State any two ways apartheid was practised in South Africa.

(i) _____

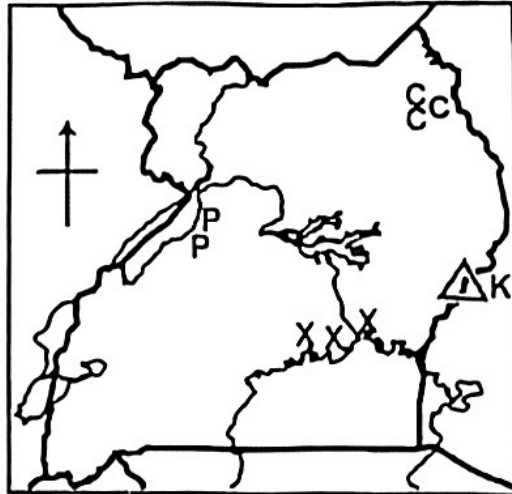
(ii) _____

(b) Mention any one nationalist in South Africa who fought against apartheid policy

(c) Why was the Truth and Reconciliation Commission formed in South Africa after the apartheid policy?



48 Study the sketch map of Uganda below and use it to answer the questions that follow



(a) Name the highest peak of the mountain marked K.

(b) State one cause of the rebellion that was staged against colonial rule in area marked PP

(c) How can the government control the challenge of cattle rustling in area marked CCC?

(d) Write the type of rainfall that is commonly received around the area marked XXX.


49. a) Name the organisation that brings together countries that export oil in the world.

(c) Mention any two African countries that are members of the organisation named in (a) above.

(i)

(ii)

(b) State any one way the above organisation benefits its members.



50. a) Name the system of administration where colonialists used traditional chiefs to rule on their behalf in Uganda.

(b) Give any two reasons why the colonialists used the above type of rule in Uganda.

(i) _____

(ii) _____

(c) Why was Africa's resistance to colonial rule easily defeated?

In each of the questions 51 to 55, answer Either the Christian Or the Islamic question but not both alternatives in a number. No marks will be awarded to a candidate who attempts both alternatives on the same number.

51. Either: a) Name any two religious organisations in Uganda that offer free services to the needy people.

(i) _____

(ii) _____

(b) Give any two reasons why Christians give offertory in church

(i) _____

(ii) _____

Or a) Name any two religious organisations that offer free services to the needy people.

) _____

) _____

(b) Give any two reasons why Muslims pay zakat.



52. Either: (a) Who baptised Jesus Christ in River Jordan?

(b) Give any two reasons why Jesus Christ was baptised

(i) _____

(ii) _____

(c) Mention any one material used during baptism

Or (a) Who was the first person to be converted to Islam?

(b) Who converted the person named in (a) above into Islam?

(c) Mention any two ways Muslim leaders support Muslim converts

(i) _____

(ii) _____

53. Either (a) Who is the true source of happiness to Christians?

(b) Mention any three things a Christian can do to live a successful life

(i) _____

(ii) _____

(iii) _____

Or (a) Who is the true source of happiness to Muslims?

(b) Mention any three things a Muslim can do to live a successful life

(i) _____

(ii) _____

(iii) _____

54. Either: Match the information in list A to that in list B correctly.

LIST A	LIST B
(i) Adam	- received the Ten Commandments.
(ii) Job	- is remembered for his endurance.
(iii) Moses	- preached repentance in preparation for the coming of the Messiah.
(iv) John the Baptist	- was the first person God created.

- (i) Adam _____
 (ii) Job _____
 (iii) Moses _____
 (iv) John the Baptist _____

Or Match the information in list A to that in list B correctly

LIST A	LIST B
(i) Adam	- Is remembered for his endurance
(ii) Ayub	- remembered for deliverance
(iii) Musa	- was born without a father
(iv) Isa	- was the first prophet in Islam

- (i) Adam _____
 (ii) Ayub _____
 (iii) Musa _____
 (iv) Isa _____

55 Either "My Father, if it is possible, take this cup of suffering from me!"
 (Matthew 26:39)

(a) Who said these words?

(b) Why did the person you have named in (a) above say those words?

(c) Mention any two reasons why Christians pray

- (i) _____
 (ii) _____

Or "Say I seek refuge in Allah the Lord of the daybreak." (Surah 113)

(a) What is the name of the above Surah?

(b) Give one request made by Muslims in the above Surah

(c) Mention any two reasons why Muslims pray

- (i) _____
 (ii) _____

